

國立高雄應用科技大學
107學年度研究所碩士班招生考試
模具工程系碩士班
靜力學

試題 共 3 頁，第 1 頁

- 注意：a. 本試題共5題計算題，須詳列計算過程或敘明理由。每題20分，總共100分。
b. 作答時不必抄題，可以用中文或英文方式作答。
c. 考生作答前請詳閱答案卷之考生注意事項。

1. The link in **Fig.1** is subjected to two forces F_1 and F_2 . Determine the magnitude and direction of the resultant force.

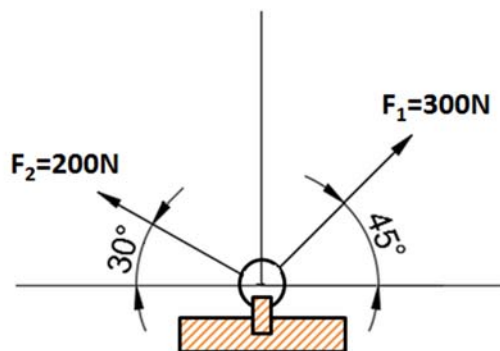


Fig.1

2. Determine the horizontal and vertical components of reaction on the beam caused by the pin at **B** and rocker at **A** as shown in **Fig.2**. Neglect the weight of the beam.

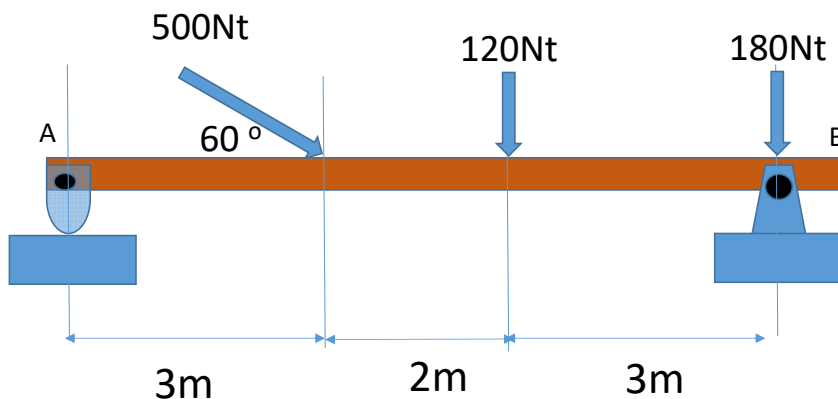


Fig.2

3. Determine the force in each member of the truss shown in **Fig.3** and indicate whether the members are in tension or compression.

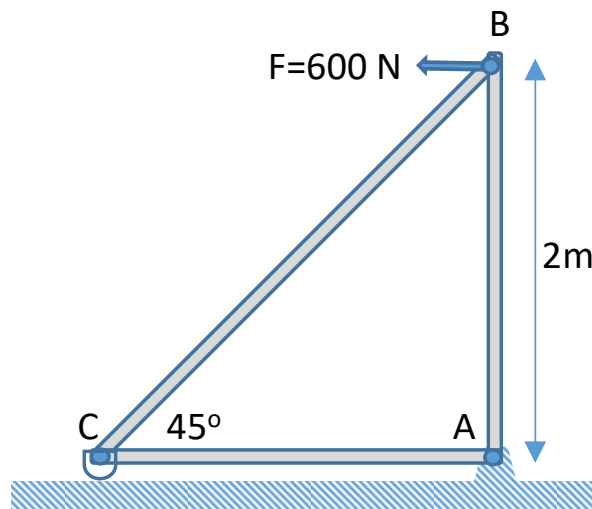


Fig.3

4. Draw the shear and moment diagrams for the overhang beam in **Fig.4**

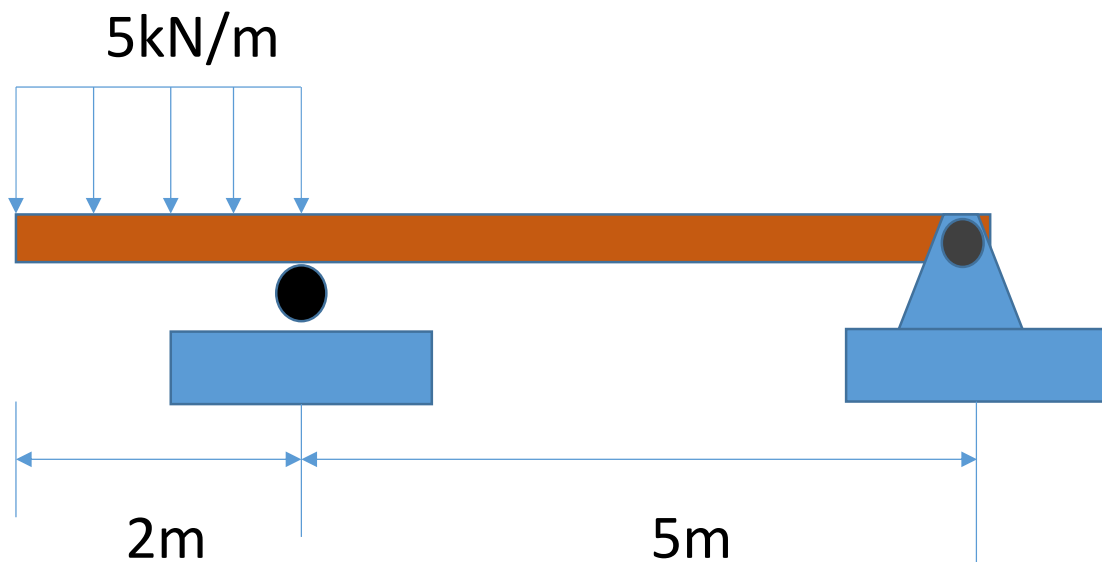


Fig.4

5. Blocks **A** and **B** have a mass of 4kg and 12kg, respectively, and are connected to the weightless links shown in **Fig.5**. Determine the largest vertical force **P** that can be applied at the pin C without causing any movement. The coefficient of static friction between the blocks and the contacting surfaces is $\mu_s = 0.4$.

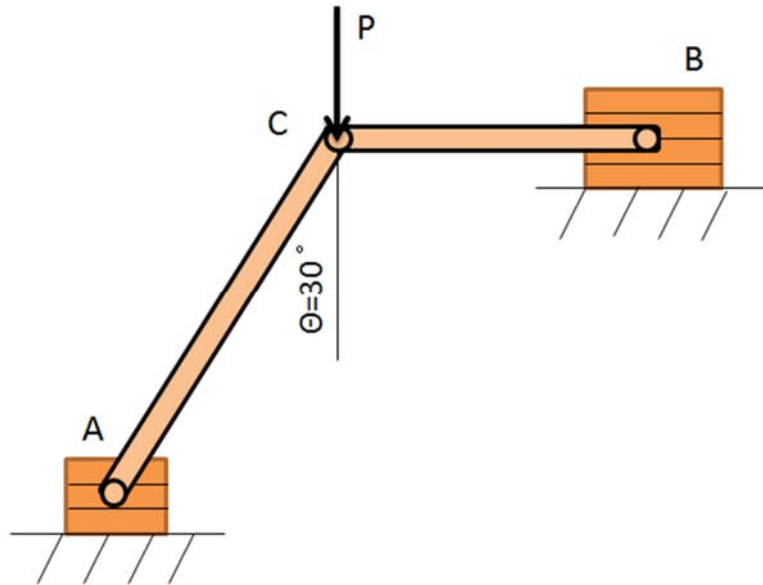


Fig.5